



Dubai Grand International School

MODEL PAPER (2023-24)

Class: III

SCIENCE

M. Marks: 40

Roll no:

Marks obtained:

Name:

Section:

Q1. Long answer type questions. (Do any three)

1. What happens to the crops when too much rain is observed?

2. What is the position of sun in the afternoon?

3. Which type of soil is present in northern plains?

4. Why houses present in the colder regions have sloping roofs?

Q2. Short answer type questions.

1. Name two sources of water pollution.

2. Name three sources which produce unpleasant sound.

3. Why is storm harmful for us?

4. What happens when we add water to the soil?

Q3. Answer the following questions in one word.

1. A violent disturbance in the atmosphere because of strong winds.

2. An organic component of soil, formed by decomposition of leaves by microbes. _____

3. Natural compost used for fertilizing the land. _____

4. The force that attracts a body towards centre of the earth. _____

Q4. Replace the underlined words with the correct words and rewrite the sentences.

1. There is no water on the earth. _____

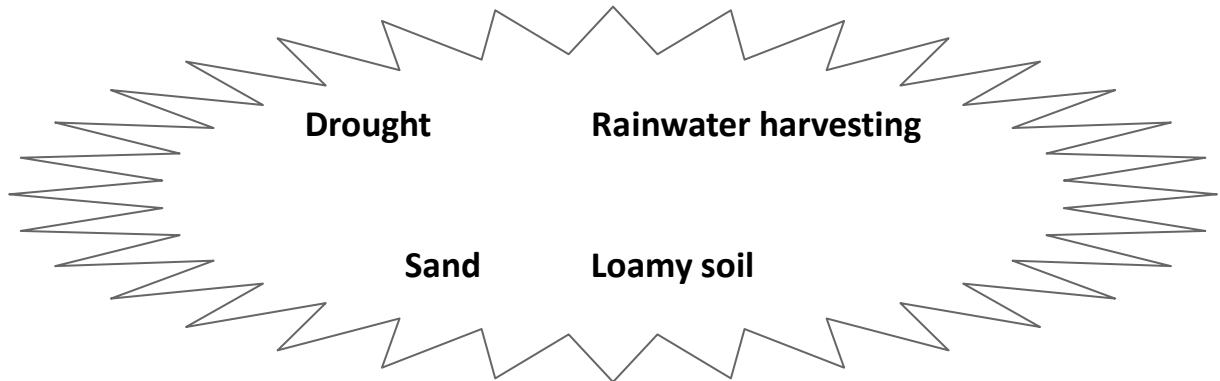
2. Kalpana Chawla travelled in the spacecraft named chandrayaan.

3. Loamy soil has lot of sand present in it.

4. Too much rain causes drought. _____

5. During mornings and evenings the rays are direct.

Q5. Solve the puzzle from the given clues.



1. Mixture of clay, sand and humus. _____
2. Loose granular substance formed from erosion of rocks.

3. Process of collecting rainwater into tanks for domestic purpose.

4. Prolonged dry period in the natural climate cycle that can occur anywhere in the world. _____

Q6. Observe the picture given below and answer the questions that follow.



1. What do you understand by the given picture?

- a. Water pollution b. Soil pollution. c. Air Pollution d. Noise pollution

2. The harmful effects of the given picture can be seen on

- a. Human beings b. Aquatic animals c. Both a and b d. None of these

3. How can we improve the condition of the given picture?

- a. By taking care of natural resources
b. By ignoring it
c. By spreading awareness
d. Both a and c

4. Who is responsible for the condition in the given picture?

- a. Animals b. Humans c. Plants d. None of these



Dubai Grand International School

MODEL PAPER (2023-24)

Class: III

ENGLISH

M. Marks: 40

Roll no:

Marks obtained:

Name:

Section:

“Section A”

Reading Comprehension

Q1. Read the given passage carefully and answer the following questions that follow. (5M)

Fox and his wife wanted to eat chicken. So, the fox silently went into a farmer’s field nearby. He caught a chicken moving lonely and put it in his bag. A good monkey on a tree saw this incident. The monkey followed the fox. On his way home, the fox stopped at a lake to drink water, keeping the bag aside. The monkey silently released the chicken from the bag and kept a pumpkin in its place. The fox reached home. His wife was heating water in an earthen pot to boil the chicken. She eagerly took the bag and dumped it in the pot. Due to the pumpkin’s weight, the earthen pot was broken. The boiled water spilled over them and they suffered burns on their bodies. After that, they never dared to steal any chicken.

1. What did the fox and his wife want to eat?

- a) Fish
- b) Chicken
- c) Vegetables
- d) Steak

2. Where did the fox catch the chicken?

- a) Forest
- b) Farmer's field
- c) Lake
- d) Mountain

3. Who witnessed the fox catching the chicken?

- a) Rabbit
- b) Monkey
- c) Squirrel
- d) Owl

4. What did the monkey do when the fox stopped at the lake?

- a) Stole the fox's bag
- b) Released the chicken and kept a pumpkin in its place
- c) Joined the fox for a drink
- d) Ran away

5. How did the fox and his wife suffer burns on their bodies?

- a) They touched a hot stove.
- b) They fell into a bonfire.

c) The earthen pot broke and boiled water spilled over them.

d) They got sunburned at the lake.

“Section B”

Literature

Q1. Answer the questions given below. (Do any three)

(6M)

1. What did Amina make at school? What things did she use?
2. According to the poet, what splendid scenes does the eagle get to see from the sky?
3. Why did the Emperor agree to the offer of the poor man?
4. Why did the thief steal a pear fruit?

Q2. Complete the story mapping.

(3M)

The Pear Seed

The diagram consists of three cloud-shaped boxes arranged in a triangle. The top-left cloud is labeled "Title" and contains two horizontal lines for writing. The top-right cloud is labeled "Story setting" and contains three horizontal lines for writing. The bottom-center cloud is labeled "Characters" and contains three horizontal lines for writing.

“Section C”

Writing

- Q1.** Overconfidence is a curse. Do you think Amina was tricked by her overconfidence of being creative ? State why or why not. **(2M)**
- Q2.** Illustrate your opinion on the title of the poem ‘roundabout’. Why has the poet named it so?
- Q3.** Write a paragraph on wonders of science. **(5M)**

OR

Write a letter to your principal for remission of fine.

Vocabulary

- Q1.** Write the rhyming word of the word sights from your poem roundabout. **(0.25M)**
- Q2.** Change the word in the bracket to ordinal number and complete the sentence. **(0.25M)**
1. April is the _____ (four) month of the year.
- Q3.** Encircle the correct spelling. **(0.25M)**
1. Treasurer tresuror treasure treasurer
- Q4.** Fill in the blank to make a correct spelling. **(0.25M)**
1. S_____l_____n_____i_____

Q5. Match the word with their appropriate meaning.

(1M)

1. Sequins	very valuable
2. Frowned	fly high
3. Soars	Angry
4. Precious	small shiny pieces of metals used for decoration.

“Section D”

GRAMMAR

Q1. I. Replace the underlined word with suitable pronoun.

(2M)

1. Dubai Grand School is touching the perks. Dubai Grand School is working under a great mentorship.
2. Miss Rajni works as a Hindi teacher. Miss Rajni has done her PhD in Hindi.
3. Ants are the small wingless insects. Ants have a sting and lives in a complex colony.
4. Arun and Ajay are twins. Arun and Ajay are very mannered boys.

II. Write an appropriate pronoun in the blanks.

1. Moon is the only satellite of the earth. _____ shines brightly at night.
2. Droupadi Murmu is the President of India. _____ comes from a very humble background.
3. Kailash Satyarthi, an Indian, won the latest noble prize in 2014. _____ won the prize in the field of peace.
4. Elephants are the largest living land animals. _____ are found in different parts of the world.

Q2. I. Find the noun.

(2M)

1. Let's go to the library.
2. Sudha Murthy is the writer of "How I taught my grandmother to read".
3. 3rd class is the best class in the school.
4. We should keep air clean.

II. Fill in the blanks with the correct nouns given below.

piano umbrella shoes nurse

1. My mother is a _____.
2. These _____ are dirty.
3. Please open an _____.
4. She plays _____ well.

Q3. I. Fill in the blank with suitable article.

(2M)

1. _____ apple a day, keeps _____ doctor away.
2. Charles Babbage is considered as _____ father of _____ computer.

II. Underline the articles used in it.

One day, a dog who was very hungry was crossing the street. Suddenly he saw a shop selling meat. Since the dog hadn't eaten for a few days, he could not control his hunger.

Q4. I. Circle the preposition.

(2M)

1. You should come with us to the park.
2. They stayed at the hotel during vacations.

3. Prakash came and sat beside me and my brother.
4. Why did you hide that bag behind your back?

II. Fill in the blanks with appropriate prepositions.

1. This shop doesn't have the toys I was looking _____. (**up/for**)
2. The teacher divided the sweets _____ all the children.
(**between/among**)
3. Bruce did not fare well _____ his examination. (**in/at**)
4. The dog is grateful _____ its owner. (**to/for**)

Q5. I. Read the following sentences and select the correct form of the verb given in brackets. (2M)

1. Rita _____ a mile every day. (**run/runs**)
2. She dogs _____ all night. (**barks/bark**)
3. The cat _____ the snake. (**catch/caught**)
4. We _____ in the park in the evenings. (**play/plays**)

II. Fill in the blanks with the correct form of helping verbs (is/am/are).

1. Penny _____ my sister.
2. I _____ very interested in the new project.
3. We _____ best friends.
4. Vinit _____ my friend since class 2.

Q6.I. Read the sentences given below and underline the adverbs. (2M)

1. The boy is too careless.
2. The winds are very strong.
3. The baby slept soundly.
4. The soldiers fought the war valiantly.

II. Fill in the blanks by choosing the most appropriate adverb from the table.

pretty	before	too	quickly
--------	--------	-----	---------

1. Riya ran to her mother _____.
2. The scores are _____ good.
3. We have met _____.
4. I know him _____ well.

Q7. I. Underline the conjunctions. (2M)

1. The pilot refused to take off the flight because the weather was not good.
2. It was very cold so he took bath with hot water.
3. We will get success if we work hard.
4. Do you like the hills of Darjeeling or the sea of Digha?

II. Join these sentences using the conjunctions given in brackets.

1. The Earth moves around the Sun. The Moon moves around the Earth. (**and**)
2. Mr. Roy is a rich merchant. He has to travel to many places for business. (**so**)
3. Gourab can't participate in the race. He is injured. (**because**)
4. Sima loves chocolate. Anima loves ice-cream. (**and**)

Q8. I. Circle the adjectives given below. (2M)

1. The fox is a sly animal.
2. Mary had a little lamb.
3. The selfish giant didn't allow the children to enter his garden.
4. The foolish dog barked at its reflection and lost its food.

II. Write an appropriate adjective in the given statements.

empty	fat	wide	green
-------	-----	------	-------

1. The _____ cat jumped into an _____ box.
2. The _____ lizard hid in the _____ crack in the wall.

Q9. Punctuate the following sentence.

(1M)

1. where were you
2. May I have your pencil



Dubai Grand International School

MODEL PAPER (2023-24)

Class: III

MATH

M. Marks: 40

Roll no:

Marks obtained:

Name:

Section:

Duration: 2 Hours

“Section-A”

Q1. How many days are there in a leap year? (5M)

- a) 365 b) 366 c) 367 d) 364

Q2. How many months in a year have 30 days?

- a) 5 b) 6 c) 7 d) 8

Q3. How much weight should be added to the 750 g to make it 1 kg?

- a) 200g b) 250g c) 350g d) 330g

Q4. The line that divides a figure in two equal halves is called

- a) Line of symmetry b) dotted line c) horizontal line d) Vertical line

Q5. All four sided figures are called

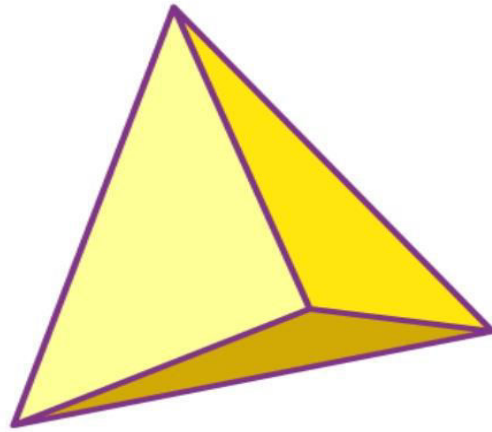
- a) Quadrilaterals b) Triangles c) Squares d) Rectangles

“Section-B”

(8M)

Q6. Half past 5 in the evening is denoted as _____

Q7. A triangular pyramid has how many



Edges _____

Corners _____

Faces _____

Q8. Convert 46 m into cm _____

Q9. Convert 5 days into hours _____

“Section C”

(12M)

Q10. Name two months which come one after another and have the same number of days.

Q11. Arrange the following in columns and perform the different operations.


a) $15\text{ m } 56\text{ cm} + 30\text{ m } 8\text{ cm} + 52\text{ m } 78\text{ cm}$

b) $10\ 1\ 540\ \text{ml} - 7\ 1\ 380\ \text{ml}$

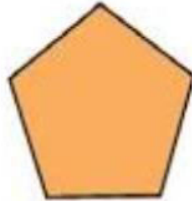
c) $29\ \text{kg } 535\ \text{g} - 15\ \text{kg } 430\ \text{g}$

d) $375 \text{ km } 483 \text{ m} + 85 \text{ km } 65 \text{ m}$

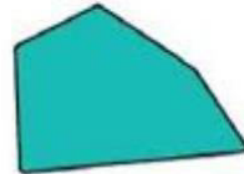
Q12. Which of the following can be divided into two similar halves using a line? Draw the line of symmetry.



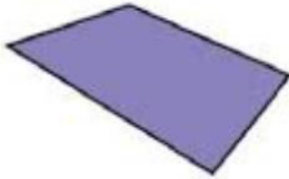
Symmetric / Not symmetric



Symmetric / Not symmetric




Symmetric / Not symmetric



Symmetric / Not symmetric



Symmetric / Not symmetric



Symmetric / Not symmetric

Q13. Define a line segment. Draw it using a scale.

“Section-D”

(Do any three)

(15M)

Q14. What is a rectangle? Draw a rectangle of length 5 cm and breadth 3cm respectively.

Q15. Complete the table.

Objects	Number of faces	Number of edges	Number of corners
Cube			
Sphere			
Cylinder			

Q16. A container can hold 6 l 900 ml of water. The container contains 2 l 350 ml of water already. How much more water can be filled in the container?

Q17. If the school begins at 8:30 a.m and works for 7 hours, at what time the school will over?

Q18. Read the story and fill in the blanks with correct time using a.m and p.m.

Sania wakes up at 8:10 a.m.She takes 15 minutes get ready for the school.

She get dressed up by _____.She spend 10 minutes over breakfast and

10 minutes to keep books in her bag. She leaves the school by _____

It takes 5 minutes to walk to school. She reaches school at _____.



Dubai Grand International School

MODAL PAPER (2023-24)

Class: III

SOCIAL STUDIES

M. Marks: 40

Roll no:

Marks obtained:

Name:

Section:

Duration: 2 Hours

Q1. Long answer type questions. (Do any three)

(12M)

1. Why is Bengaluru famous all over the world?

Ans. _____

2. How did the tools help the early humans?

Ans. _____

3. How did the early humans invent the wheel ?

Ans. _____

4. What is the traditional dress of the people of Hyderabad?

Ans. _____

Q2.Short answer type questions. (8M)

1. Comment on the festival Pongal.

Ans. _____

2. Define Neolithic Age.

Ans. _____

3. Write a short note on the food of early humans.

Ans. _____

4. Throw some light on the climate of Bengaluru.

Ans. _____

Q3. Very short answer questions. (5M)

1. Define the term invention.

Ans. _____

2. Name the animals which were used to drag the carts from one place to another.

Ans. _____

3. Define the term Evolution.

Ans. _____

4. Comment on Pongal festival.

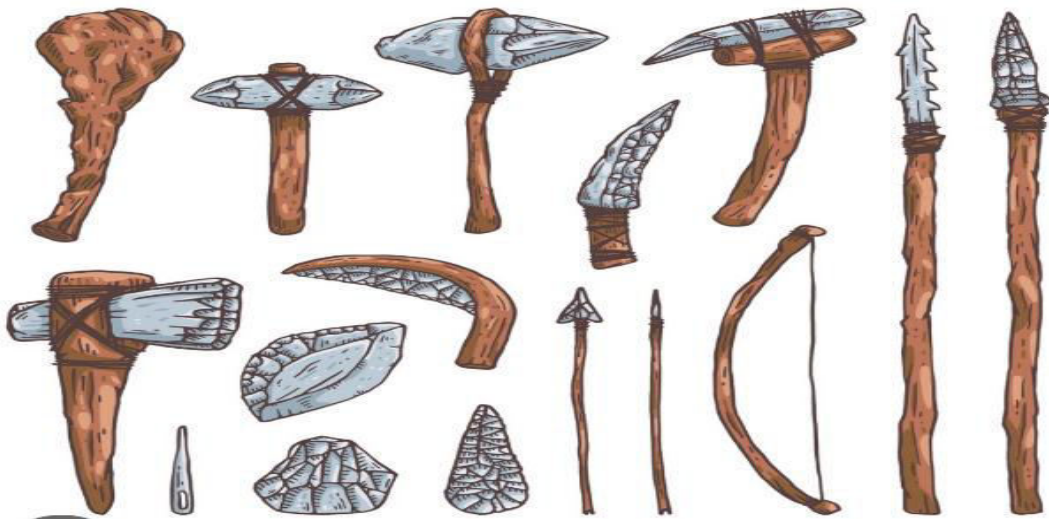
Ans. _____

5. What do you understand by the term Mesolithic Age?

Ans. _____

Q4. Observe the picture and answer the questions that follow.

(3M)



1. What type of tools are shown in the above picture?

- a. copper tools b. iron tools c. stone tools d. bronze tools

2. These tools were used by
 - a. early humans
 - b. children
 - c. females
 - d. none of these
3. These tools were used for
 - a. digging
 - b. fighting
 - c. roads
 - d. all of the above
4. Material used for making the above shown tools was
 - a. sand
 - b. metal
 - c. stone
 - d. clay
5. The period during which stone tools were made came to be known as
 - a. Copper Age
 - b. Iron Age
 - c. Bronze Age
 - d. Stone Age
6. Stone Age is split into _____ separate periods.
 - a. 3
 - b. 6
 - c. 8
 - d. 2

Q5. List the salient features of Mumbai or Kolkata. (3M)

Q6. Complete the passage by choosing the right answers given in the key below. (4M)

Rasam	Chennapatnam	dhoti and shirt	Tamil
Marina Beach	Pongal	saree	Chennai

_____ is the capital of Tamil Nadu. It gets its name from the word _____.

_____. The main language spoken in Chennai is _____. The traditional dress of men is _____ & _____. Women wear _____.

_____. Rice with _____ is one of the popular dishes of Chennai.

The main festival of Chennai is _____. The popular tourist spot is_____.

Q7. Correct the given statements.

(3M)

1. Dog was used to drag carts from one place to another.

2. The first wheel was discovered about 10,000 years ago.

3. Bengaluru is the capital of Kerala.

4. Onam is the main festival of Jammu and Kashmir

5. Thiruvananthapuram is located on the eastern side of India.

6. Bengaluru is known as the pearl City of India.

Q8. On a political map of India, locate and label Chennai and Mumbai. (2M)





DUBAI GRAND SCHOOL
INTERNATIONAL

success in both worlds

• دبئی گرینڈ انٹرنیشنل اسکول ایچ ایم ٹی سرینگر

مضمون: اردو

جماعت: سوم

نمبرات: ۲۰

(حصہ الف پڑھنے کا فہم)

سوال نمبر ۱: مندرجہ ذیل اقتباس کو غور سے پڑھئے اور نیچے
دئے گئے سوالات کے جوابات لکھیے۔ ۴

گاؤں کے گھر شہر کے گھروں سے مختلف ہوتے ہیں۔ گاؤں
کے گھر کچے اور شہر کے گھر پکے ہوتے ہیں جو سیمنٹ اور
اینٹوں سے بنائے جاتے ہیں۔ شہر کی زندگی مصروف اور
تھکا دینے والی ہوتی ہے۔ گاؤں کی زندگی پرسکون اور
خاموش ہوتی ہے۔ گاؤں کے لوگ جانور پالتے ہیں اور
تازہ ہوا کے ساتھ ساتھ انھیں دودھ، انڈے، مکھن، دہی،
تازہ سبزیاں اور پھل وغیرہ بھی ملتے ہیں۔ گاؤں کے لوگ
کھیتوں میں کام کرتے ہیں۔

۱۔ شہر کے گھر کس چیز سے بنائے جاتے ہیں؟

۲۔ گاؤں کی زندگی کیسی ہوتی ہے؟

۳۔ گاؤں کے لوگ کھانے میں کیا استعمال کرتے ہیں؟

۴۔ گاؤں کے لوگ کہاں کام کرتے ہیں؟

سوال نمبر ۲: مندرجہ ذیل اقتباس کو دئے گئے الفاظ کی

مدد سے خالی جگہوں کو پر کیجئے۔ ۴

(اونچا، پابندی، رہنما، جدوجہد، ادیب، تکلیفیں، کانگریس،

جیل)

ابوالکلام آزاد بہت بڑے۔۔۔۔۔۔۔۔۔۔ اور عالم تھے۔

اس کے ساتھ ہی آپ بہت بڑے سیاسی۔۔۔۔۔۔۔۔۔۔ بھی

تھے۔ انڈین نیشنل۔۔۔۔۔۔۔۔۔۔ میں شامل ہو کر آپ

نے ہندوستان کی آزادی کے لیے۔۔۔۔۔۔۔۔۔۔ کی۔

ہندوستان کی تحریک آزادی میں آپ کو۔۔۔۔۔۔۔۔۔۔

مقام حاصل ہے۔ انگریز حکومت نے آپ کو کئی بار

۔۔۔۔۔۔۔۔۔۔ بھیجا۔ آپ کو طرح طرح کی

دی گیس۔ آپ کے اخباروں پر۔۔۔۔۔۔۔۔۔۔ لگادی

گئی۔

(حصہ ب لکھنے کی صلاحیت)

سوال نمبر ۳: درج ذیل الفاظ سے جملے بنائیں۔ ۳

(صرف تین)

۱۔ عالم ۲۔ درخت ۳۔ آہٹ ۴۔ گھاس

سوال نمبر ۴۔ اس تصویر کو غور سے دیکھئے اور نیچے دئے گئے الفاظ کی مدد سے اس کے بارے میں چار جملے لکھیے۔

(پرندہ، چالاک، کالا، چونچ)



سوال نمبر ۵: 'پسندیدہ کھیل' عنوان پر مضمون لکھیے۔ ۵

(حصہ ج ادب)

سوال نمبر ۶: مندرجہ ذیل سوالات کے جوابات لکھیے۔ ۸

(صرف چار)

- ۱۔ شاعر ہمیں کیا کرنے پر زور دے رہا ہے؟
- ۲۔ حبہ خاتون کشمیر کی ملکہ کیسے بنیں؟
- ۳۔ ننھے خرگوش نے جب ہرنی کو گاجردی تو وہ کیا بن کر سامنے آگئی؟

۴۔ زون کو 'حبہ خاتون' کا نام کس نے دیا؟

۵۔ مشکل کام کیسے آسان ہو سکتا ہے؟

سوال نمبر ۷: دئے گئے الفاظ کے معنی لکھیے۔ ۴

۱۔ جولانی ۲۔ فانی ۳۔ تحریک ۴۔ بے حد

سوال نمبر ۷: دئے گئے الفاظ کے معنی لکھیے۔ ۴

۱۔ جولانی ۲۔ فانی ۳۔ تحریک ۴۔ بے حد

گرا نمر:

سوال نمبر ۸: دئے گئے مذکور الفاظ کے مونث الفاظ لکھیے۔

(۴)

۱۔ دادا ۲۔ مرد ۳۔ ہرن ۴۔ ماما

سوال نمبر ۹: دئے گئے الفاظ کو متضاد سے ملائیں۔ ۵

۱۔ آج، نیچے

۲۔ زمین، بائیں

۳۔ دائیں، آسمان

۴۔ اوپر، کل