



**DUBAI GRAND
INTERNATIONAL SCHOOL**
SUCCESS IN BOTH WORLDS

Worksheets

CLASS 1ST
SESSION: 2023-24

ENGLISH:

Name: _____

Roll no: _____

Topic: Firoz And The Fire Engine

Chapter no: 5



Q1. Read the passage and answer the questions that follow.

Fire fighters are important people because they help to keep us safe. Fire fighters are people who put out fires. Fire fighters wear special uniforms to protect them from flames. They ride on special trucks with ladders and hoses. They use the hoses to spray water on fires. Being a fire fighter you will need training. Fire fighters must be brave and ready to fight fires any time of day or night.

1. What do fire fighters do?

2. Where do fire fighters work?

3. What kind of person would make a good fire fighter?

Q2. With the help of given web diagram explain the qualities of fire fighters.

Topic: Blue And Yellow Mixing**Chapter no: 6****Q1. Read the passage and answer the questions that follow.**

Holidays are important for relaxation. They provide relief from the monotony of our daily routine. They help us to refresh ourselves and go back to work with renewed energy. Winter holidays are awaited by a lot of people after working hard throughout the year. There are no rules for going to school and playing for a short time and then completing our homework. We can manage our time according to our wish.

1. Why do you think holidays are important for us?

2. How do you manage your holidays?

3. Write a short note on winter holidays?

Q2. Fill in the blanks and also search all the colours you find in the given word grid below and colour them.

1. The walls are of _____ colour.

2. Windows are _____ in colour.

3. Roof should be _____.

4. By mixing yellow and blue we will get _____ colour.

5. Blue, yellow and _____ are primary colours.



GRAMMAR**Noun**

Q1. Look for the underlined noun in each sentence. Tell if the noun is a person, place or thing.

1. The store is open on Sunday.

place

2. The car was in front of the house.

3 She was going to catch the ball.

4. I could not see the boy.

5. Chips are my favorite snack.

Q2. Fill in the blanks using is, am, are.

1. We scared.



2. He in the garden.



3. I drawing shapes.



4. They riding their bikes.





5. She a nurse.



Q3. Fill in the blanks using These are/Those are /This is /That is.

1. _____ are blouses.  

2. _____ is a jacket.  

3. _____ is a dress.  

4. _____ are skirts.  

5. _____ are t-shirts.  

6. _____ is a cap.  

Articles

Q1. Complete the sentence with correct article.

A	An	the
----------	-----------	------------

1. _____ plates are on the dining table.
2. I want ____ burger.
3. There is ____ orange on the table.
4. _____ students are welcoming the chief guest.
5. He is in _____ rush.
6. I have got _____ plan for that.

EVS:

Name: _____

Roll no: _____

Topic: Weather

Chapter no: 8

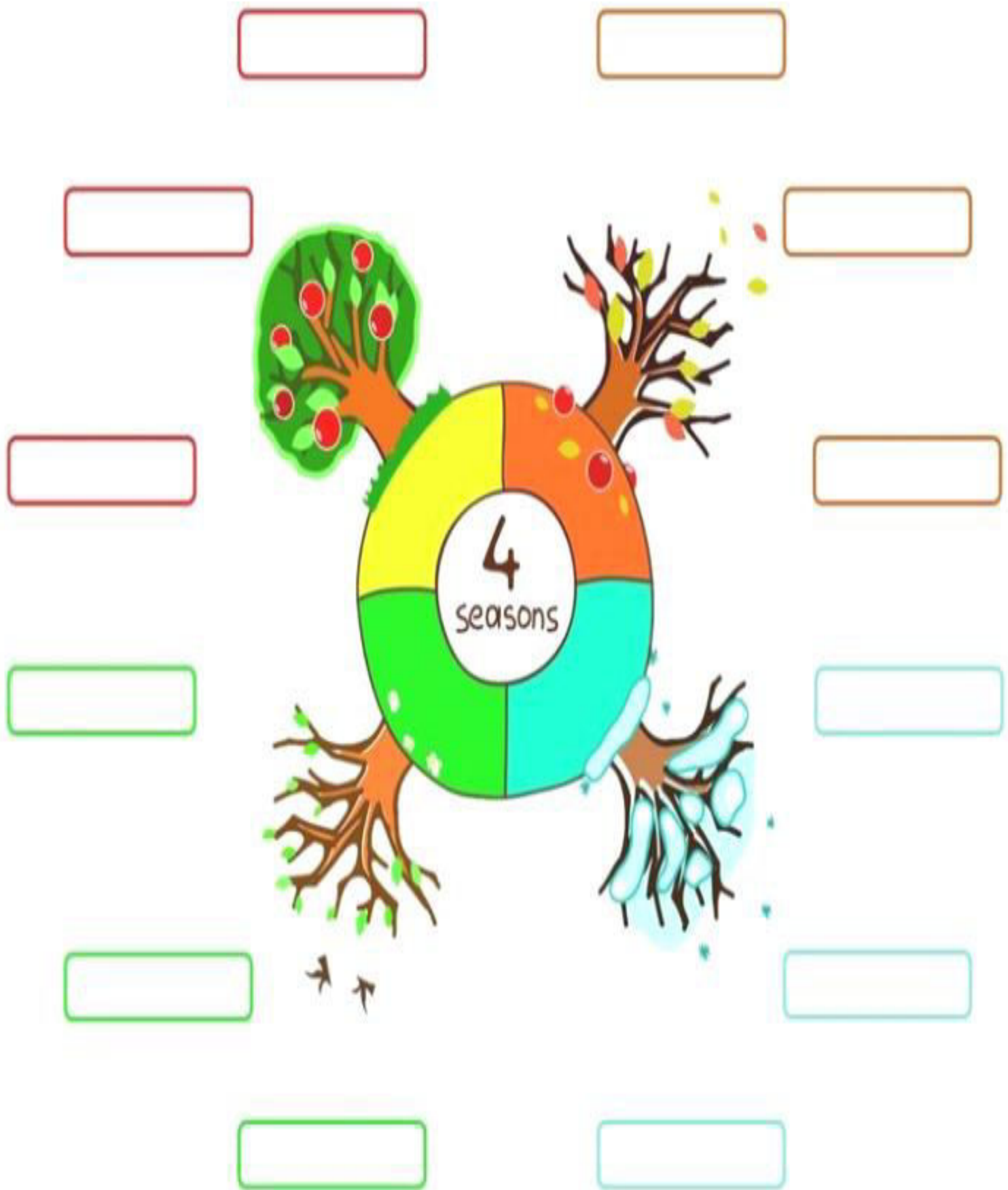
Q1. Search and underline the given words below.

CLOUDY WARM RAIN HOT FOGGY WINDY COLD SNOW SUNNY

A	L	T	C	V	J	L	B	R	S	S	F
N	H	F	H	A	Y	C	W	P	F	U	O
C	O	L	D	M	T	L	B	S	Q	T	G
N	T	S	J	S	N	O	W	W	R	H	G
S	Y	W	F	U	M	U	R	A	I	N	Y
H	C	D	T	N	F	D	O	R	F	R	U
M	R	W	A	N	O	Y	I	M	H	T	O
W	I	N	D	Y	T	H	I	N	D	W	Y

Q2. Fill in the boxes with the correct month according to the seasons.

January February March April May June July
August September October November December



Q3. Fill in the blanks with the given words below.

sunny stormy windy rainy cloudy snowy



1. It is a _____ day.



2. It is a _____ day.



3. It is a _____ day.



4. It is a _____ day.



5. It is a _____ day.

Q4. Write the weather according to the following things mentioned below.

1.



2.



3.



4.



5.



Topic: Water Around Us**Chapter no: 6****Q1. Fill in the blanks with the correct words.**

1. Dirty water contains (**germs/tap**).
2. The water from rain is called (**drums, rainwater**).
3. (**Close/Open**) the tap while brushing your teeth.

Q2. Choose the correct option.

1. Drinking dirty water can make us
 - a. tall
 - b. ill
 - c. healthy
 - d. happy
2. Which of these do you use to store water?
 - a. plastic
 - b. drum
 - c. bucket
 - d. both b and c
3. How can one kill the germs in drinking water?
 - a. by boiling it
 - b. by wasting it
 - c. by storing it
 - d. by freezing it

Q3. Match the following.

Rain



Pond



River



Well



Sea



Q4. Tick the pictures where water is being used.



Q5. Tick the pictures where water is being used properly and cross out the ones where it is being wasted.



MATHEMATICS:

Name: _____

Roll no: _____

Topic: Shapes And Patterns**Chapter no: 4****Q1. Recognize and identify the names and properties of common 2D shapes.**

Square	Circle	Rectangle	Triangle
--------	--------	-----------	----------



This 2D shape is a _____.

It has _____ corners.

It has _____ sides.



This 2D shape is a _____.

It has _____ corners.

It has _____ sides.



This 2D shape is a _____.

It has _____ corners.

It has _____ sides.




This 2D shape is a _____.


It has _____ corners.

It has _____ sides.

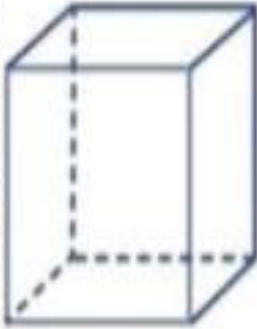
Q2. Fill in the name, number of faces, edges, vertices for each shape.




Name: _____
Faces: _____
Edges: _____
Vertices: _____



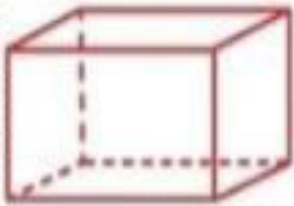
Name: _____
Faces: _____
Edges: _____
Vertices: _____



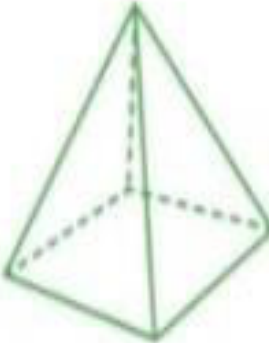
Name: _____
Faces: _____
Edges: _____
Vertices: _____



Name: _____
Faces: _____
Edges: _____
Vertices: _____

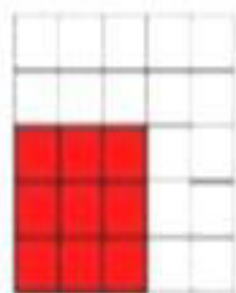
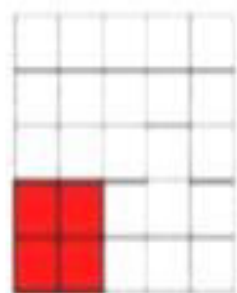


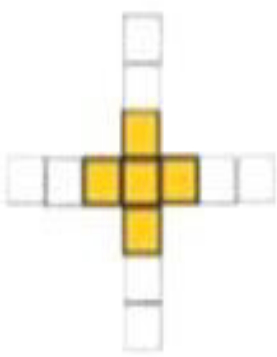
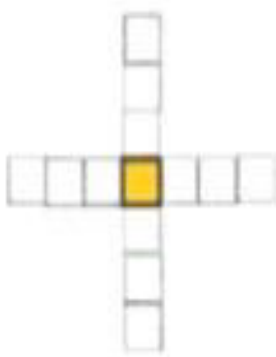
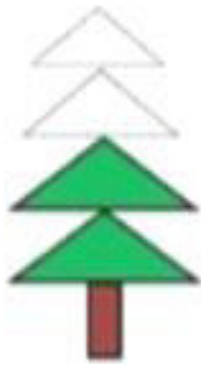


Name: _____
Faces: _____
Edges: _____
Vertices: _____



Name: _____
Faces: _____
Edges: _____
Vertices: _____

Q3. Observe these growing patterns. Trace/ darken the lines and color the shapes to draw the picture that comes next in each pattern.




Topic: Fractions

Chapter no: 5

Q1. Color the picture accordingly.

$\frac{1}{2}$



$\frac{1}{2}$



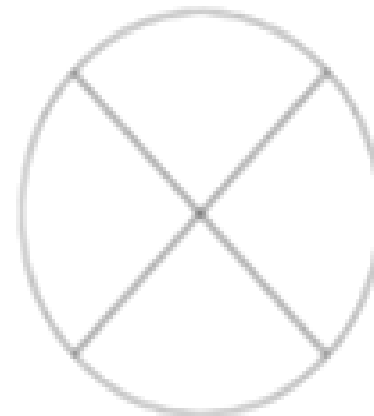
$\frac{1}{3}$




$\frac{1}{3}$



$\frac{1}{4}$

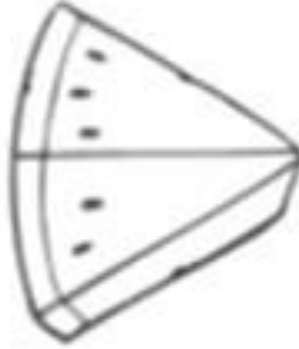


$\frac{1}{4}$




Q2. Color the following.

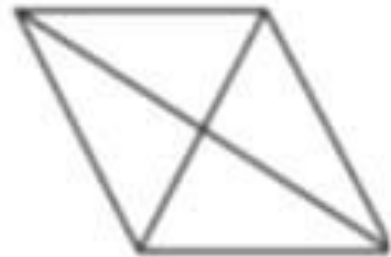
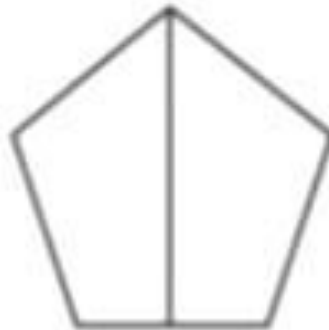
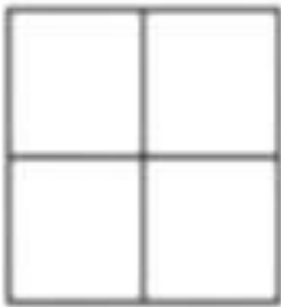
Color $\frac{1}{2}$ red.



Color $\frac{1}{4}$ orange.



Color one part. Is it $\frac{1}{2}$ or $\frac{1}{4}$? Circle the answer.



$\frac{1}{2}$

$\frac{1}{4}$

$\frac{1}{2}$


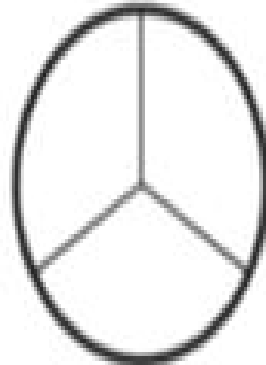

$\frac{1}{4}$

$\frac{1}{2}$

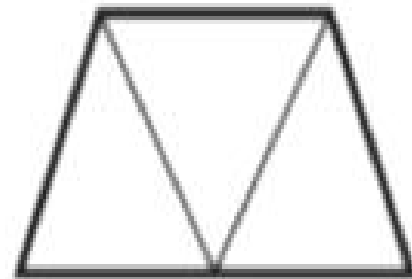

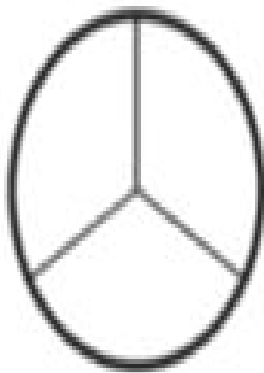
$\frac{1}{4}$

Q3. Color the following part of the shapes.




Color the shapes that are divided into 3 parts.



Color one third of each shape.



Draw lines to divide each shape into thirds.



Topic: Data Handling**Chapter no: 6**

Q1. Look at the chart given below and answer the given questions.

Items	How many children in the school have it
Pens	47
Pencil	62
Crayon	51
Eraser	48
Pencil box	24

1. How many children have crayons?

.....

2. How many children have pencils?

.....







3. Which item is the least that children have?

.....

4. If all children have pencils, how many children are there altogether?

.....

Q2. Mr. Petal gave year 3 children the information from his shop on how many ice creams were sold during the hottest week of the year. Look at the pictogram they made and answer the questions.

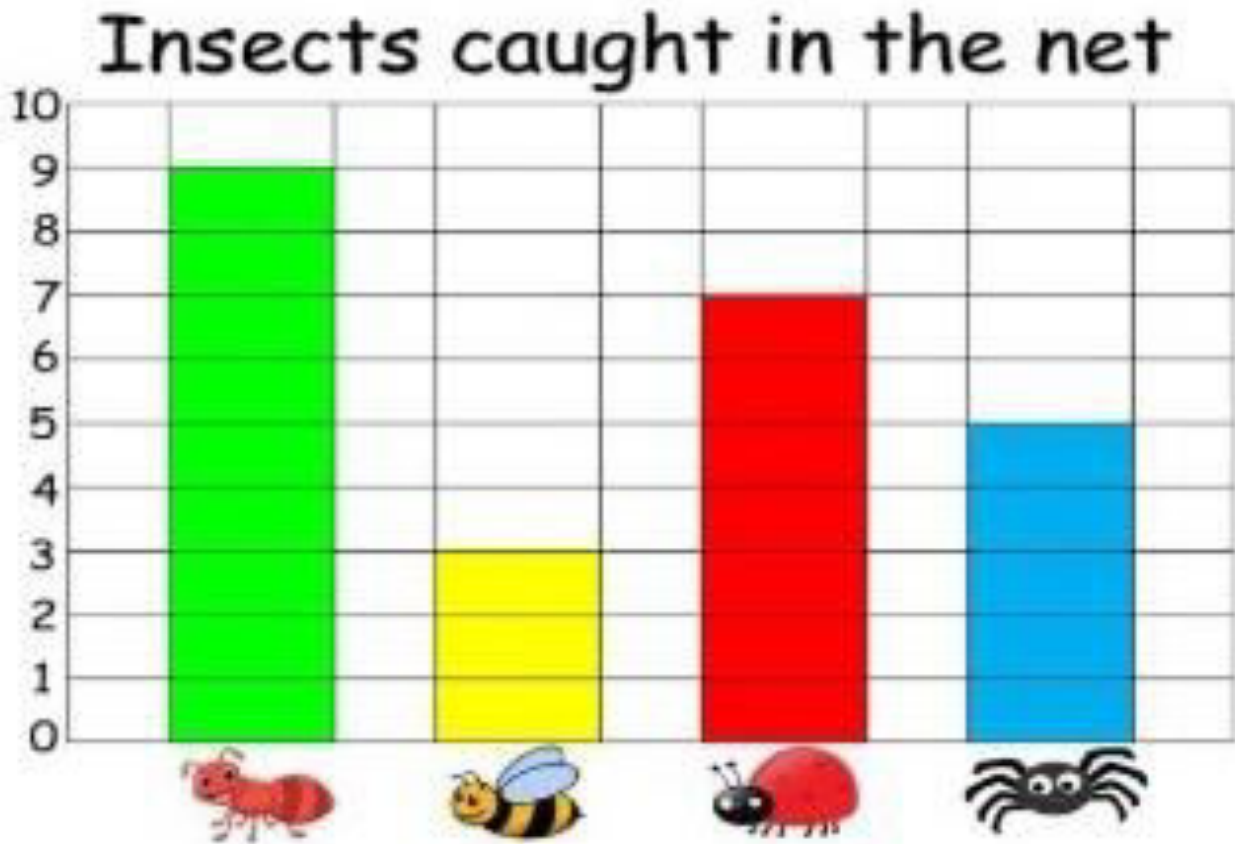
Day	Ice creams sold
Monday	
Tuesday	
Wednesday	
Thursday	
Friday	
Saturday	
Sunday	Closed

 = 2 ice creams

- a** How many ice creams were sold on Tuesday? _____
- b** How many ice creams were sold on Thursday? _____
- c** How many ice creams were sold on the weekend? _____
- d** Why do you think Mr. Petal didn't sell any ice creams on Sunday?

- e** How many ice creams were sold on Monday? _____
- f** Which day did Mr. Petal sell the most ice creams? _____
- g** On which day did he sell the least ice creams? _____
- h** How many ice creams did Mr. Petal sell in a week? _____

Q3. Read the bar graph and answer the following questions.



How many _____ were caught?

1. 

2. 

3. 

4. 

5. Which insect was caught the most?



6. Which insect was caught the least?



7. How many bees and spiders were caught?

URDU:

جماعت : اول ورک شیٹ

نام _____ رول نمبر _____

* مذکر کو مونث سے ملائیں۔

مذکر	مونث
دھوبی	والدہ
والد	دھوبن
مرد	مالن
مالی	نائن
نائی	درزن
درزی	عورت

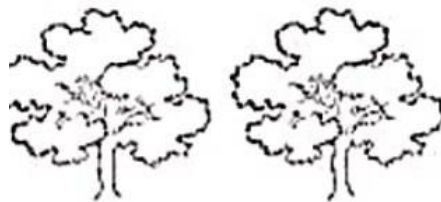
☆ حروف کی آدھی اشکال لکھیے:

ب _____ ج _____ س _____
 ع _____ ک _____ م _____

☆ ”یہ“ اور ”وہ“ لکھیے:



_____ آم ہے۔



_____ درخت ہیں۔



_____ گاڑی ہے۔



_____ جوتے ہیں۔

☆ دیئے گئے ناموں میں سے پھلوں اور سبزیوں کے نام علیحدہ علیحدہ لکھیے:

آلو، آم، گوبھی، تربوز، پالک، کیلا،
ٹماٹر، سیب، بھنڈی، گاجر، انگور، مالٹا

سبزیوں کے نام	پھلوں کے نام