



SUMMER VACATION ASSIGNMENT

GRADE V

Important instructions:

1. All the students will download the summer assignment and will get the print out of the same.
2. The date of submission for the summer assignment (worksheets) will be 11th July 2023 (Tuesday).

English

Class: 5th

Section: _____

Name: _____

Roll No.: _____

1. Daedalus was the father of

a. Icarus

b. Prince

c. Princess

d. King Minos

2. Daedalus was

a. Inventor

b. Sculptor

c. King

d. Writer

3. Why was Daedalus shut in a tower?

4. Who killed Minotaur?

5. What is the lesson that we learnt from this myth?

6. What is an adjective and degrees of comparison in adjectives?

7. Assume you are a prince in the story and explain how you went to labyrinth, killed the Minotaur and escaped from the labyrinth safely?

8. Use in sentences:

a. Abhor

b. Dilemma

c. Monster

d. Drowned

e. Culprit

Helping a Friend

Imagine that you walk into the playground and see your friend sitting alone and looking sad. Describe what you would do if your friend was upset. How would you help? (Write five sentences only)

Urdu

مضمون: اُردو

جماعت: پانچویں

نام: _____ سیکشن: _____ رول نمبر: _____

۱. کسی بھی خاص نام کو اسم معرفہ کہتے ہیں اور کسی بھی عام نام کو اسم نکرہ کہتے ہیں۔
دئے گئے جملوں میں اسم معرفہ اور اسم نکرہ چُن کر لکھیے۔

اسم معرفہ

اسم نکرہ

جملے

۱. کشمیر خوبصورت جگہ ہے۔
 ۲. وہ نیک لڑکا ہے۔
 ۳. جہانگیر ہندوستان کا مشہور بادشاہ ہے۔
 ۴. اس کتاب میں دلچسپ کہانیاں ہیں۔
۲. املا درست کیجئے۔

۱. حجرت کرنا: _____

۲. اُمدہ مشورہ: _____

۳. تواف: _____

۴. عزم: _____

۳. دئے گئے الفاظ کو جملوں میں استعمال کریں۔

۱. حفاظت: _____

۲. منافق: _____

۳. اہمیت: _____

کالم "الف" کو کالم "ب" سے ملائیں۔

الف	ب
روشن	نرم
ظاہر	حلال
حرام	تاریک
سخت	باطن

Mathematics

Class: 5th

Section: _____

Name: _____

Roll No.: _____

Complete the following table and write all the factors of 28.

$1 \times \square = 28$
$\square \times 14 = 28$
$4 \times \square = 28$
$7 \times \square = 28$

Match each number with its factors.

Numbers	Factors
12	1,2,4,5,10,20
16	1,2,3,4,6,12
20	1,2,4,8,16

Prime and Composite Numbers

Tick the all the prime numbers from 1-100.

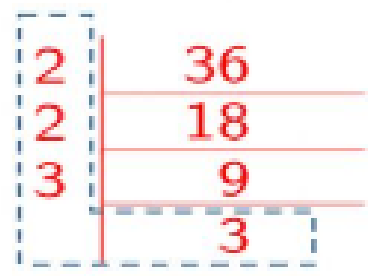
1	2	3	4	5	6	7	8	9	10
11	12	13	14	15	16	17	18	19	20
21	22	23	24	25	26	27	28	29	30
31	32	33	34	35	36	37	38	39	40
41	42	43	44	45	46	47	48	49	50
51	52	53	54	55	56	57	58	59	60
61	62	63	64	65	66	67	68	69	70
71	72	73	74	75	76	77	78	79	80
81	82	83	84	85	86	87	88	89	90
91	92	93	94	95	96	97	98	99	100

Find the Prime Factors of the following numbers.

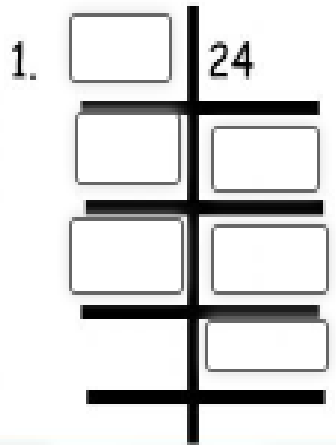
Be sure to list the prime factors in order from least to greatest.

Using Repeated Division

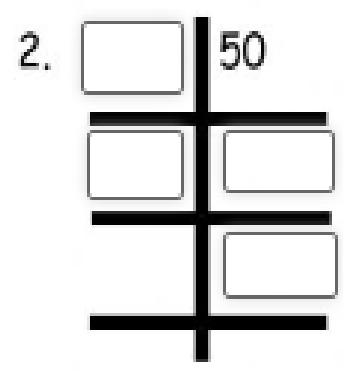
Find the prime factors of 36



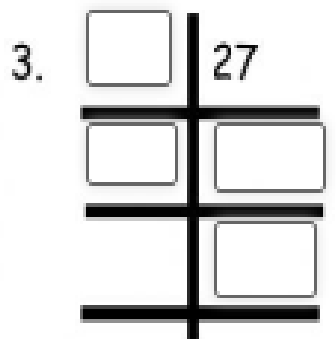
$$36 = 2 \times 2 \times 3 \times 3$$



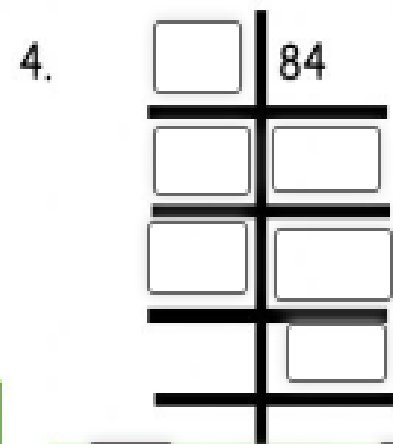
$$\underline{\quad} \times \underline{\quad} \times \underline{\quad} \times \underline{\quad} = 24$$



$$\underline{\quad} \times \underline{\quad} \times \underline{\quad} = 50$$



$$\underline{\quad} \times \underline{\quad} \times \underline{\quad} = 27$$



$$\underline{\quad} \times \underline{\quad} \times \underline{\quad} \times \underline{\quad} = 84$$

Arrange the following numbers given below.

53

63

77

89

93

71

85

97

69

67

48

43

Composite Numbers

Prime Numbers

Divisibility of a number by 2, 3, or 5:

Choose the correct answer(s) depending on whether the number is

Divisible by 2, 3 or 5:

Divisible by 2

Divisible by 3

Divisible by 5

Number	2	3	5
315	<input type="checkbox"/>	<input type="checkbox"/>	<input type="checkbox"/>
712	<input type="checkbox"/>	<input type="checkbox"/>	<input type="checkbox"/>
85	<input type="checkbox"/>	<input type="checkbox"/>	<input type="checkbox"/>
630	<input type="checkbox"/>	<input type="checkbox"/>	<input type="checkbox"/>
9624	<input type="checkbox"/>	<input type="checkbox"/>	<input type="checkbox"/>
91	<input type="checkbox"/>	<input type="checkbox"/>	<input type="checkbox"/>
70	<input type="checkbox"/>	<input type="checkbox"/>	<input type="checkbox"/>
63	<input type="checkbox"/>	<input type="checkbox"/>	<input type="checkbox"/>

Science

Class: 5th

Section: _____

Name: _____

Roll No.: _____

Choose if the food is healthy or unhealthy



HEALTHY
UNHEALTHY



HEALTHY
UNHEALTHY



HEALTHY
UNHEALTHY



HEALTHY
UNHEALTHY



HEALTHY
UNHEALTHY



HEALTHY
UNHEALTHY



HEALTHY
UNHEALTHY



HEALTHY
UNHEALTHY

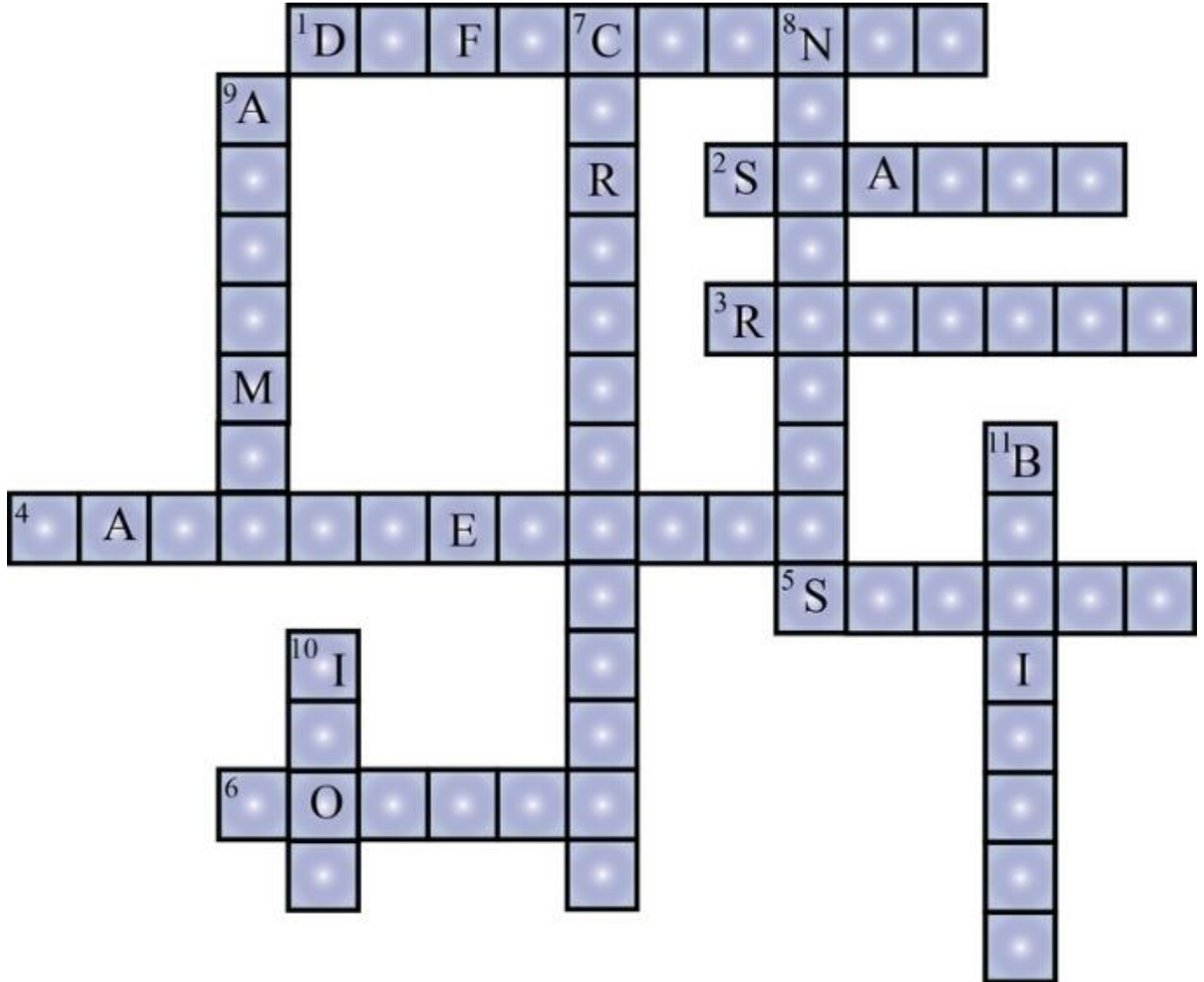


HEALTHY
UNHEALTHY



HEALTHY
UNHEALTHY

Solve the crossword puzzle given as figure from the clues given below.



Across

1. Lack of nutrient in our diet over a long period causes these diseases.
2. Rice and potato are rich in this type of carbohydrate.
3. Deficiency disease in bones making it becomes soft and bent.
4. The diet that provides all the nutrients that our body needs in right quantities along with adequate amount of roughage and water.
5. Deficiency disease with bleeding gums.
6. Disease caused due to the deficiency of iodine.

Down

7. Starch and sugar in our food are rich in this type of energy giving nutrient.
8. The term given to the useful components of food.
9. The disease caused by deficiency of iron in diet.
10. Green leafy vegetables and apples are rich in this mineral.
11. Deficiency disease caused due to the lack of vitamin - B1 in the diet.

1. Match each nutrient with the food that contains it.

Proteins •



Carbohydrates •



Vitamins •



Minerals •



Fats •



2. Choose the correct nutrient to complete the definitions.

- 1) _____ make our muscles stronger and give our body the nutrients we need for growth and repair.
- 2) _____ help our immune system and prevent illness.
- 3) _____ give our body energy.

Social Science

Class: 5th

Section: _____

Name: _____

Roll No.: _____

Q1. Landform Match.

Match the Landform to its description.

Plain	A pile of sand created by wind
Valley	High with a conical peak
Continent	Low land between mountains or hills
Mountain	Vast areas of sand
Plateau	One of the seven of the largest bodies of land
Desert	Vast areas of fertile land
Dune	High with a flat top, also called tableland

Q2. Landform Quiz Choose the correct options.

- Which of the following is an example of a continent?
 - Africa
 - Hong Kong
 - South pole
- What is a continent?
 - A large body of water surrounded by land
 - A land area with mountains
 - A large body of land surrounded by water
- What are landforms?
 - Group or chain of mountains
 - Earth's major relief features
 - Lowlands that extend over vast areas
- What are small water bodies in a desert called?
 - Pond
 - Stream
 - Oases

5. The highest plateau of the world is

- a. Deccan plateau
- b. Tibetan plateau
- c. African plateau

Q3. Draw a picture of each Landform.

LANDFORMS

Directions: Draw a picture of each landform.

MOUNTAIN

RIVER

WATERFALL

VOLCANO

LAKE

DESERT

Q4. Identify landforms and write your answer in the box.

hill

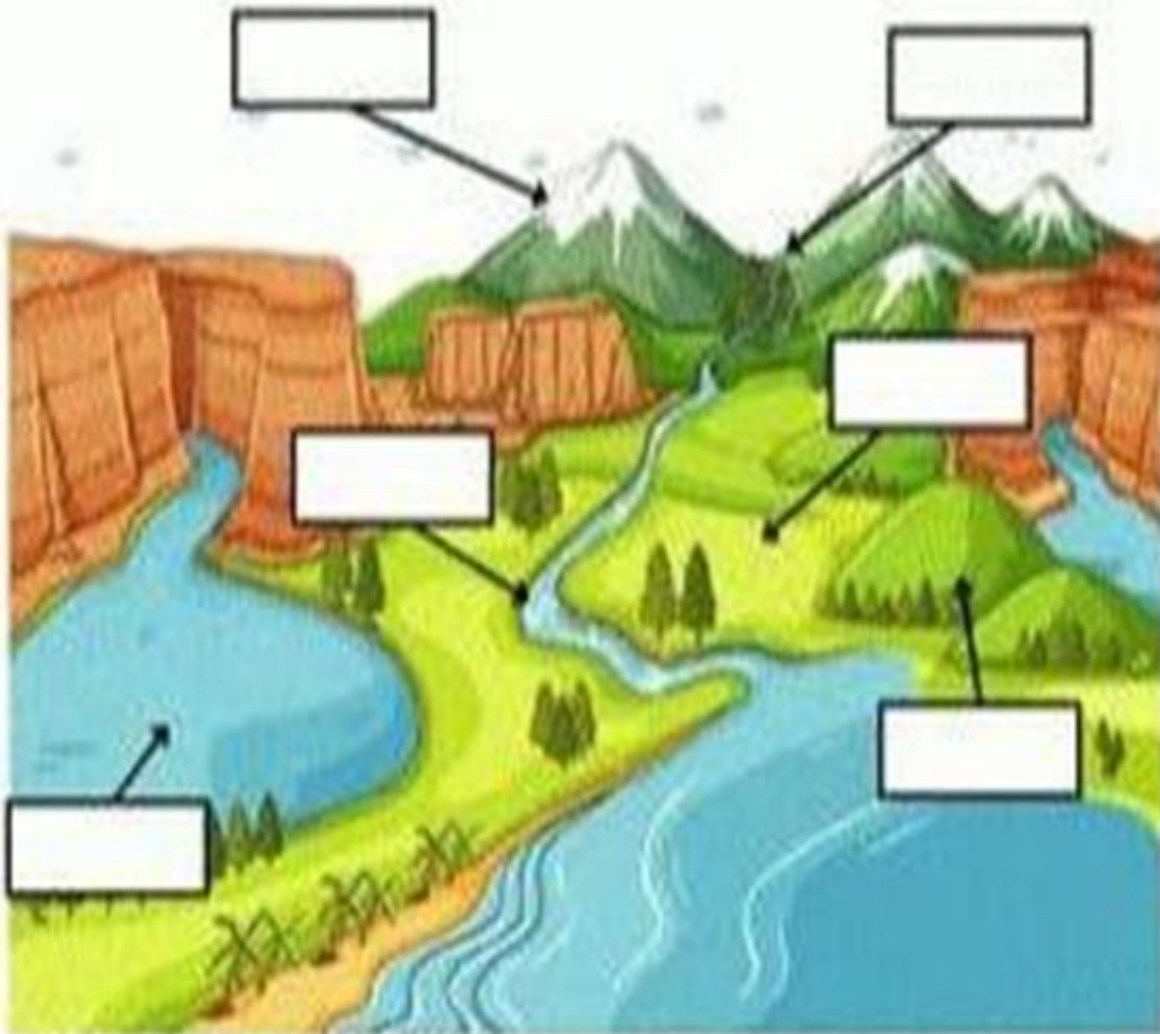
mountain

lake

river

valley

plain



Q5. Match the pictures with the names of water bodies and landforms.

Bodies of water and Landforms

Direction: Draw lines to match the names to the pictures.



Mountains

Valley

River

Plain

Ocean

Lake

Desert

Waterfall

Pond

Island



Kashmiri

Class: 5th

Section: _____

Name: _____

Roll No.: _____

مضمون: کاشمر

جماعت: پونہم

(ڈرک شیٹ)

☆ بونہ کنہ دینہ آمتن سطرن منز ورتا ونہ آمتن لفظن ہند کر واملاد درست تہ مناسب آواز نشانہ تہ کر واستعمال۔

زمانہ باپتہ . محانہ باپتہ چھ این رہمت نبی ﷺ امی ۔

نعت چھ تھ نضمہ ونان یتھ منذ حضرت محمد ﷺ تھذرص ، بجرص ، سپرت پاقس تہ

صورت پاقس تارہف آصن کرنہ آمت۔

اللہ تعالیٰ ہن قور مومن پٹھ بوڑ احسان ۔ حضرت محمد ﷺ چھ رہمت تہ شفلط والی پیگمبر۔

قران مجید آو تمن پیٹھ نازل کرنہ۔ قران مجید چھے رہمتہ، برقتہ تہ ہکتہ واجینز الحامی قباب

(۲)۔ ” نعت شریف “ سبق پرتھ کر و دینہ آمتن لفظن ہنز و ہنہ۔

نگاہِ رحمت: -----

خداے برتر: -----

سج: -----

شفا عت: -----

عانِ رحمت: -----

عنایت: -----

(۳)۔ جنسہ حسابہ چھ ناؤتس ز قسم۔ (۱)۔ نرناؤت (Masculine) (۲)۔ ماؤت (Feminine)

بوئہ کنہ دینہ آمتو جملو منہ ژاؤ رورناؤت تہ ماؤتاؤت۔

ماؤتاؤت	نرناؤت	(۱)۔ مول چھ زینان دیار۔
-----	-----	(۲)۔ موج چھ رنان بتہ۔
-----	-----	(۳)۔ دوئ چھہ از آمتہ۔
-----	-----	(۴)۔ کانڈر چھ تھران ژوچہ۔
-----	-----	(۵)۔ کوئ چھہ کلونجہ پٹھ۔
-----	-----	(۶)۔ بیور چھ دوان۔

(۴)۔ دینہ آمتن نرناؤتس مقابلہ لیکھو ماؤتاؤت تہ ماؤتاؤتس مقابلہ لیکھو نرناؤت۔

ژھاؤج ، کانڈر ، گجرانی ، مقدم ، حاج ، ہاپڑ ، مام ، پوچھ

پینہ ، گریؤس ، پٹھان ، دوئ باؤے ۔

Arabic

Class: 5th

Section: _____

Name: _____

Roll No.: _____

ايها الطلاب عليكم ان تحفظوا من سورة الاعلى الى سورة الناس

Happy Summer Vacation

holidays

The word 'holidays' is written in a playful, rounded font. Each letter is filled with a different color and pattern: 'h' is orange with yellow circles, 'o' is white with green dashed lines, 'l' is yellow, 'i' is green with pink dots, 'd' is pink, 'a' is white with orange dots, 'y' is yellow, and 's' is pink with white stripes. Above the letters are various decorative elements: a large pink heart above 'h', a small orange star above 'o', a small green star above 'i', a white daisy flower above 'a', and two green leaves above 'y'. Small black outlines of the letter 'G' are placed above the 'o', 'i', and 'a'.